





3. A designer wants to introduce a new line of bookcases. He wants to make at least 100 bookcases, but not more than 2000 of them. He predicts the cost of producing  $x$  bookcases is  $C(x)$ . Assume that  $C(x)$  is a differentiable function. Which of the following must he do to find the minimum average cost,  $c(x) = \frac{C(x)}{x}$ ?

(I) Find the points where  $c'(x) = 0$  and evaluate

6. A particle is moving in the first quadrant downward on the hyperbola  $\frac{x^2}{16} - \frac{y^2}{64} = 1$ . It leaves the hyperbolic path at the point (5, 6) and continues along a straight line. At what point does the particle cross the x-axis?

a)  $\frac{16}{5}, 0$

9. Calculate the derivative of the function  $f(x) = x^{(e^x)}$ .

a)  $e^x x^{(e^x-1)}$

b)  $x^{(e^x)} \left[ e^x \ln x + \frac{e^x}{x} \right]$

c)  $x^{(e^x-1)} e^x \left[ \frac{1}{x} + \ln x \right]$

d)  $e^x x^{(e^x-1)} \ln x$

e) none of the above

12. A hemispherical bowl of radius  $a$  contains water to depth  $h$ . Find the volume of the water in the bowl.



14. If  $f$  and  $g$  are both differentiable and  $h = f \circ g$ ,  $h'(2)$  equals

- a)  $f'(2) \circ g'(2)$
- b)  $f'(2)g'(2)$
- c)  $f'(g(x))g'(2)$
- d)  $f'(g(2))g'(2)$
- e) none of the above

15. Let  $f(x) = x|x|$ . Find  $f'(0)$ .

- a) 0
- b) 1
- c) -1
- d) does not exist
- e) none of the above

16. Evaluate:  $\lim_{x \rightarrow 0} \frac{1 - e^{-x}}{\sin x}$

- a)  $\infty$
- b) 1
- c)  $\sqrt{3}$
- d)

18. Evaluate:  $\int_0^{-1} \frac{1}{\sqrt{x+1} + \sqrt{x+1}} dx$

a)  $-2\sqrt{2} + \ln(3 + 2\sqrt{2})$

b)  $\frac{1}{-2\sqrt{2}} + \ln(3 + 2\sqrt{2})$

c)  $-2\sqrt{2} + \ln(2 + 3\sqrt{3})$

d)  $\frac{1}{-2\sqrt{2}} + \ln(2 + 3\sqrt{3})$

e) none of the above

19. Find the length of the curve  $x = \frac{y^4}{4} + \frac{1}{8y^2}$  from  $y = 1$  to  $y = 2$ .

a) —





21. Evaluate:  $\int_0^1 \sqrt{\frac{1+x}{1-x}} dx$

- a)  $\pi - 1$
- b)  $\frac{\pi}{2} - 1$
- c)  $\frac{\pi}{2} + 1$
- d)  $\frac{\pi}{4} + 1$
- e) none of the above

22. If  $f(x) = \ln|Cx|$ , for  $C \neq 0$ , then  $f'(x) =$

- a)  $\frac{1}{|x|}$
- b)  $\frac{1}{|Cx|}$
- c)  $\frac{1}{x}$
- d)  $\frac{1}{Cx}$
- e) none of the above

23. If a trigonometric substitution in terms of a secant function in the variable  $\theta$  is used to

solve  $\int_{\frac{5}{2}}^{\frac{5}{\sqrt{3}}} \sqrt{4x^2 - 25} dx$

24. What is the area of the largest rectangle that can be inscribed in the region bounded by  $y = 3 - x^2$  and the x-axis?

- a) 4
- b) 6
- c)  $\frac{3\pi}{2}$
- d)  $\sqrt{5}$

26. A ball is thrown straight up from the ground. How high will it go? Assume that  $g$  is the absolute value of the gravitational acceleration and  $v_0$  is the initial velocity.

- a)  $gv_0^2$
- b)  $\frac{1}{2}g^2 + gv_0$
- c)  $\frac{1}{2}v_0 + \frac{1}{2}v_0^2g$
- d)  $\frac{1}{2}v_0^2g^{-1}$
- e) none of the above

27. Given  $F(x) = \int_0^{x^2} e^{5t-t^2} dt$ , find  $F'(2)$ .

- a)  $4e^4$
- b)  $-3e^4$
- c)  $-3e^4 - 5$
- d)  $\frac{1}{5}e^4 - e^{10}$
- e) none of the above

28. Two electrons repel each other with a force inve

29. If  $f(x) = \sqrt{x} - x + 9$ , for  $x \geq \frac{1}{2}$ , and  $g = f^{-1}$ , then  $g'(9)$  is

- a) -2
- b)  $-\frac{5}{6}$
- c)  $-\frac{6}{5}$
- d) -1
- e) none of the above

30. Integrate:  $\int x \ln(x^2) dx$ .

- a)  $\frac{x^2 \ln(x^2)}{2} - \frac{x^3}{3} + C$
- b)  $\frac{x^2 \ln(x^2)}{2} - \frac{x^2}{2} + C$
- c)  $\frac{x^2 \ln(x^2)}{2} + \frac{x^2}{2} + C$
- d)  $\frac{x^2 \ln x}{2} - \frac{x}{2} + C$
- e) none of the above

31. Evaluate:  $\lim_{x \rightarrow \sqrt[3]{2}} \left( \frac{x^2}{2} - \frac{1}{x} \right)$

- a)  $+\infty$
- b)  $\frac{2}{3} \cdot \frac{1}{\sqrt[3]{2}}$
- c) 0
- d)  $\frac{3}{2} \cdot \sqrt[3]{2} - \frac{1}{\sqrt[3]{2}}$
- e) none of the above

32. If the product function  $h(x) = f(x) \cdot g(x)$  is continuous at  $x = 0$ , then the following must be true about the functions  $f$  and  $g$ . (Choose just one answer.)

- a) Both functions must be continuous at  $x = 0$ .
- b) One of them must be continuous at  $x = 0$ , but not necessarily the other.
- c) Both must be discontinuous at  $x = 0$ .
- d) They may be continuous or not at  $x = 0$ , all options are possible.
- e) none of the above

33. One way to compute  $\frac{1}{2}$  the area of the unit circle is to integrate

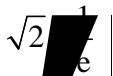
34. Evaluate:  $\int_{-1}^1 \frac{dx}{x^2 - 6x + 9}$


37. How many zeros does the function  $f(x) = x^4 + 3x + 1$  have in the interval  $[-2, -1]$ ?

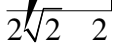
- a) no zeros
- b) exactly one zero
- c) exactly two zeros
- d) exactly three zeros
- e) none of the above

38. Given that  $f(n) = \frac{1}{\sqrt{n}\sqrt{n+1}} + \frac{1}{\sqrt{n}\sqrt{n+2}} + \dots + \frac{1}{\sqrt{n}\sqrt{n+n}}$ . Find  $\lim_{n \rightarrow \infty} f(n)$ .

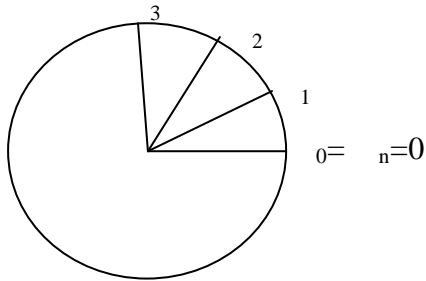
a)  $1 + \frac{1}{e}$

b) 

c) 

d) 

40. We cut a circular disk of radius  $r$  into  $n$  circular sectors as shown in the figure, by marking the angles  $\theta_i$  at which we make the cuts ( $\theta_0 = \theta_n$  can be considered to be the angle 0). A circular sector between two angles  $\theta_i$  and  $\theta_{i+1}$  has an area  $\frac{1}{2}r^2\Delta\theta_i$ , where  $\Delta\theta_i = \theta_{i+1} - \theta_i$ .



We let  $A_n = \sum_{i=0}^{n-1} \frac{1}{2}r^2\Delta\theta_i$ . Then the area of the disk,  $A$ , is given by:

- $A_n$ , independent of how many sectors we cut the disk into
- $\lim_{n \rightarrow \infty} A_n$
- $\int_0^{2\pi} \frac{1}{2}r^2 d\theta$
- all of the above
- none of the above